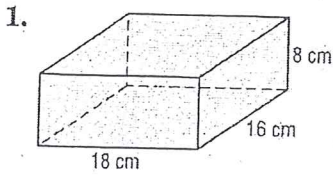


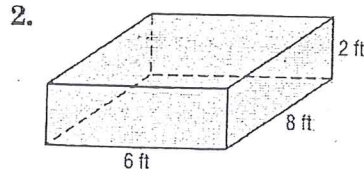
13-1 Skills Practice

Volumes of Prisms and Cylinders

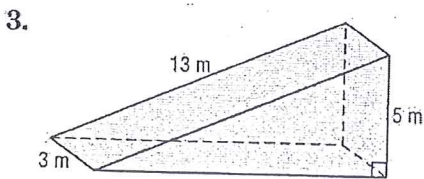
Find the volume of each prism or cylinder. Round to the nearest tenth if necessary.



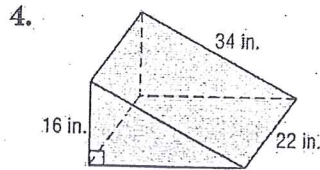
$2,304 \text{ cm}^3$



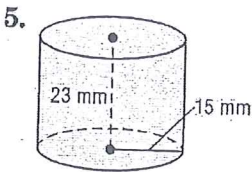
96 ft^3



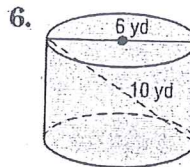
90 m^3



5280 in^3

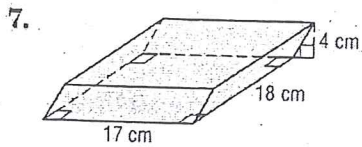


$16,257.7 \text{ mm}^3$

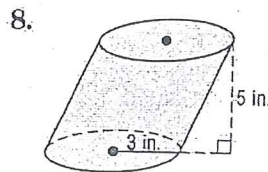


226.2 yd^3

Find the volume of each oblique prism or cylinder. Round to the nearest tenth if necessary.



1224 cm^3



141.4 in^3